

VOKALNO INSTRUMENTALNI POUK (1. letnik)  
KOLOKVIJ

Datum \_\_\_\_\_

Ime in priimek \_\_\_\_\_

Št. indeksa \_\_\_\_\_

Št. doseženih točk \_\_\_\_\_ / **50**

1. Imenuj tone (a1, B,...) in jih označi na klaviaturi

10T

Musical notation for exercise 1, showing a melody in treble and bass clefs in 4/4 time with a key signature of one sharp (F#). The melody consists of quarter notes and eighth notes.

A piano keyboard diagram with an arrow pointing to the middle C key, labeled 'a1'.

2. Dopolni ritem

6T

Musical notation for exercise 2, showing a rhythm exercise in 5/4 time with various note values and rests. The exercise includes triplets and rests.

3. Imenuj dane intervale

5T

Musical notation for exercise 3, showing a melody in treble clef in 2/4 time with various intervals. The melody consists of quarter notes and eighth notes.


## 4. Zapiši intervale

m3      v6      v2      č4      m2      č5      v3      zv4      v2      v7


## 5. Zapiši dane lestvice ter označi glavne stopnje

8T


## ES-durova lestvica




## fis-molova lestvica- NARAVNA



## HARMONIČNA




## MELODIČNA



6. Zapiši trozvoke na glavnih stopnjah v ES-durovi lestvici (pomagaj si s 5. nalogo) ter zapiši in označi njihove obrate **9T**

T S D



7. Zapiši trozvoke **4T**



d 5/3    m 5/3    zm 5/3    d 5/3    zv 5/3    m5/3    zv 5/3    zm 5/3

8. Danim durovim lestvicah zapiši vzporedne molove lestvice **3T**

dur	mol
F	
E	
AS	
G	
B	
A	